

BHAI JOGA SINGH PUBLIC SCHOOL

HOLIDAYS HOMEWORK (2021-22)

Class: IV

Subject - ENGLISH

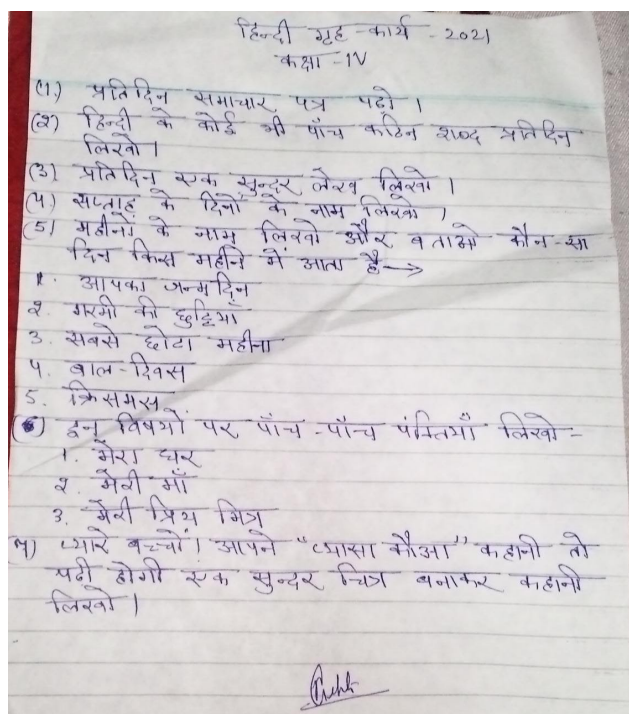
•Do all the work in a separate notebook .

1) Sow a seed (any seed) in soil. Water it regularly.Observe it weekly and record the developments in your own words Also, write a paragraph about your own feelings that how dud you feel to see it grow into a small plant.

2) Learn and one poem in English language relating to "Mother".

3) Make a poster on A4 size on the topic "Save Environment".

Subject- HINDI



Subject -Mathematics

1) Choose any two vehicle numberts, write the following for them

- a) Number names
 - b) Place value of each digit
 - c) It's Successor
 - d) It's Predecessor
- 2) Prepare a model of wall clock using waste materials.
 - 3) List any 10 items available at your home and identify their shape.
 - 4) Do the given worksheets in your Maths notebook

LetsPlayMaths.com

Number System – 1

1. What number comes between 675432 and 675434?

a) 675435	b) 675431
c) 675433	d) 675430
2. What is the smallest 6-digit number?

a) 11111	b) 100000
c) 100001	d) 100010
3. What is the successor of 876457?

a) 876456	b) 876458
c) 876455	d) None of these
4. Observe the pattern and fill in the boxes.
 205625, 206625, 207625, ,

a) 270625, 271625	b) 208525, 208625
c) 208625, 209625	d) 209625, 208625
5. What is the greatest 6-digit number?

a) 99999	b) 888888
c) 999009	d) 999999
6. What you will get after adding 999 to smallest 6-digit number?

a) 10999	b) 100999
c) 109999	d) None of these
7. Which one is correct?
 Seven lakh five hundred seventy five

a) 70575	b) 700575
c) 7000575	d) None of these
8. Which one is correct figure for four hundred sixty thousand two hundred five?

a) 460205	b) 450502
c) 460250	d) None of these

Copyright © 2019 LetsPlayMaths.com. All Rights Reserved.

LetsPlayMaths.com

9. What you will get after adding 1 to greatest 6-digit number?

a) 100000	b) 999999
c) 9999999	d) 1000000
10. $890405 = 800000 + 90000 + 4000 + 5$
 Above mentioned expanded form is True or False.

a) True	b) False
---------	----------

NUMBER NAMES



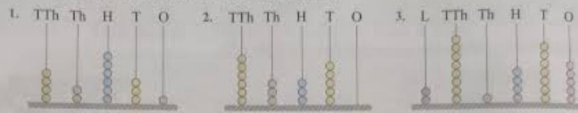
Name: _____ Date: ___/___/___ Score _____

WORKSHEET-3

Write each numeral in words.

- | | |
|------------|------------|
| 1) 40,000 | 2) 330,000 |
| 3) 300,007 | 4) 600,800 |
| 5) 3,000 | 6) 9,000 |
| 7) 100,000 | 8) 64,000 |
| 9) 41,003 | 10) 50,010 |

A. Look at the abacus and write the number.



B. Mark the periods using commas and write the number in words.

- 437005 _____
- 95212 _____
- 300715 _____
- 81576 _____
- 10010 _____

C. Write in figures.

- forty-seven thousand, nine hundred twenty-four _____
- eight lakh, fifty-two thousand, one hundred seventy-four _____
- three lakh, forty-five thousand, five hundred fifteen _____
- five lakh, two hundred thirty-nine _____
- seventy thousand seven _____

D. Write in words.

- 37,405 _____
- 3,47,118 _____
- 4,19,649 _____
- 8,30,300 _____
- 80,032 _____

E. Give the standard numeral for the following.

- $8,000 + 600 + 70 + 5$ _____
- $9,00,000 + 70,000 + 6,000 + 500 + 10 + 4$ _____

Number Names

7-digit: 51

Write each number in words.

- 1) 9,816,254 _____

- 2) 4,268,139 _____

- 3) 3,152,478 _____

- 4) 2,539,761 _____

- 5) 1,987,326 _____

Write each number in standard form.

- 1) five million, four hundred twenty-one thousand, seven hundred eighty-nine

- 2) eight million, one hundred seventy-four thousand, six hundred thirty-two

- 3) six million, two hundred forty-five thousand, three hundred one

- 4) three million, six hundred fifty thousand, two hundred eighteen

- 5) seven million, four hundred ninety-eight thousand, one hundred sixty-five

5) Learn the tables 2-20

SUBJECT: EVS

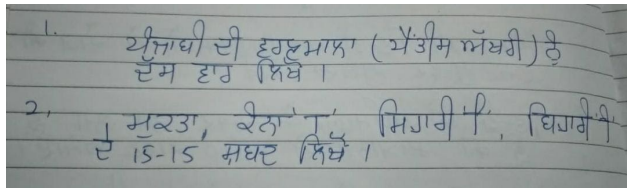
1. Make a scrapbook on different types of outdoor and indoor games. Also, paste picture of one sportsperson playing outdoor game like cricket/hockey and one sportsperson playing indoor games like chess/table tennis and write few lines on them.

2.) Collect 5 flowers and 5 different leaves with medicinal value, press and dry them. On a half chart paper draw a garden scene and paste these flowers and leaves with their names and medicinal value.

3.) Make a chart on "Our Helpers". Paste the picture or draw and write about each one of them.

4.) On a coloured A4 size sheet, write down the values which you have learnt from your family.

SUBJECT: PUNJABI



SUBJECT : G.K.

Do any one :

1) Make flash cards on any one of the following:

a) National Symbols

b) Instruments

c) Freedom fighters of India

2) Know about different dance forms of India and make a video trying to attempt any one.

SUBJECT: ART

Make a tool box/jewellery box using cardboard.

SUBJECT: DIVINITY

Write small sakhi on Guru Nanak Dev Ji.

COMPUTER – 1) Draw the pictures of Input Devices and Output Devices. 2) Write the short note on a) Keyboard b) Web Camera c) Mouse d) Scanner e) Barcode Reader f) Light Pen g) Microphone.
2) Click the pictures of Input and Output devices from Newspaper , Magazine and TV or anywhere and save it in your mobile phone by making separate folder
1) Input Devices 2) Output Devices.

COUNSELLING ACTIVITIES

- Draw the following cup in your Counselling notebooks and fill it with one positive word each week



- Watch the following video 'Priya's Mask' (available on youtube)
<https://youtu.be/yU4tznAFevg>
The animated film features the superhero, and her flying tiger, and it is a tribute to the health workers battling COVID-19.

- Students should complete the following worksheet called "Me-Worksheet".

About Me

Sentence Completion



I was really happy when... _____



Something that my friends like about me is... _____



I'm proud of... _____



My family was happy when I... _____



In school, I'm good at... _____



Something that makes me unique is... _____

STAY HOME! STAY SAFE!